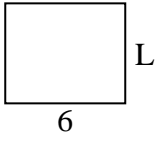


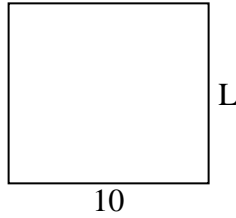


Determine the value of 'L'. Lengths are in cm (not to scale).

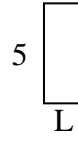
1) perimeter = 22



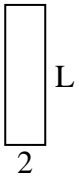
2) perimeter = 38



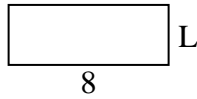
3) perimeter = 14



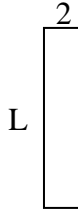
4) perimeter = 18



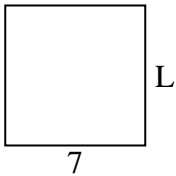
5) perimeter = 22



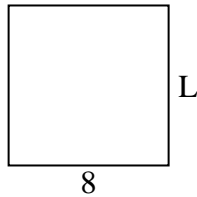
6) perimeter = 22



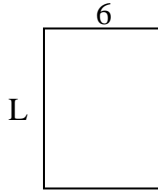
7) perimeter = 28



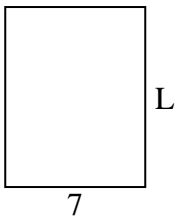
8) perimeter = 32



9) perimeter = 28



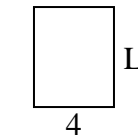
10) perimeter = 32



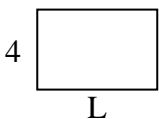
11) perimeter = 24



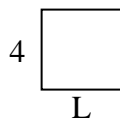
12) perimeter = 18



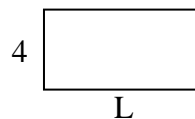
13) perimeter = 20



14) perimeter = 16



15) perimeter = 24



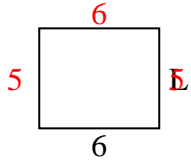
Answers

1. _____
2. _____
3. _____
4. _____
5. _____
6. _____
7. _____
8. _____
9. _____
10. _____
11. _____
12. _____
13. _____
14. _____
15. _____

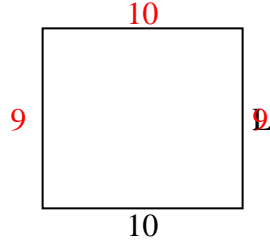


Determine the value of 'L'. Lengths are in cm (not to scale).

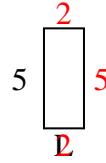
1) perimeter = 22



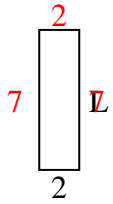
2) perimeter = 38



3) perimeter = 14



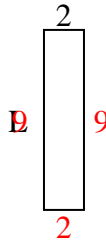
4) perimeter = 18



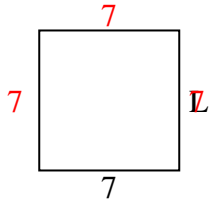
5) perimeter = 22



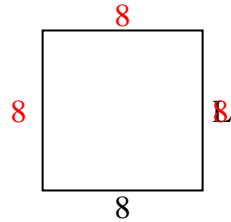
6) perimeter = 22



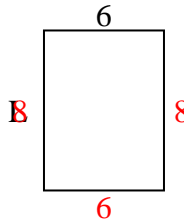
7) perimeter = 28



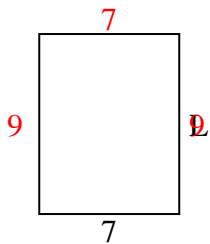
8) perimeter = 32



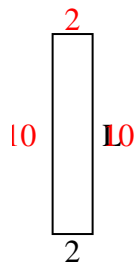
9) perimeter = 28



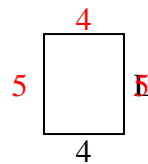
10) perimeter = 32



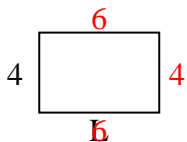
11) perimeter = 24



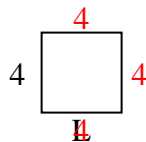
12) perimeter = 18



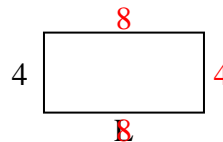
13) perimeter = 20



14) perimeter = 16



15) perimeter = 24



Answers

1. 5 cm

2. 9 cm

3. 2 cm

4. 7 cm

5. 3 cm

6. 9 cm

7. 7 cm

8. 8 cm

9. 8 cm

10. 9 cm

11. 10 cm

12. 5 cm

13. 6 cm

14. 4 cm

15. 8 cm